

Suppose \overline{RS} is congruent to \overline{MN} . For each of the set of lengths, solve for x , and find the length of each segment.

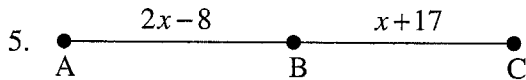
1. $RS = 3x + 17, MN = 7x - 15$

2. $RS = x + 10, MN = 2x + 4$

3. $RS = 3x - 2, MN = x + 6$

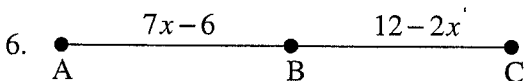
4. $RS = 5x - 10, MN = 2x + 20$

Suppose \overline{AB} is congruent to \overline{BC} . Solve for x , and find the length of \overline{AB} , \overline{BC} and \overline{AC} .



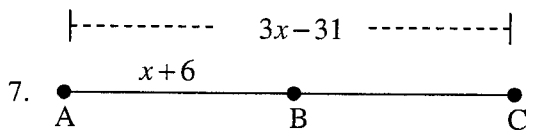
$X = \underline{\hspace{2cm}}$ $AB = \underline{\hspace{2cm}}$

$BC = \underline{\hspace{2cm}}$ $AC = \underline{\hspace{2cm}}$



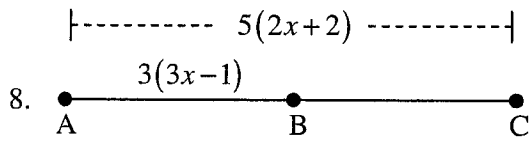
$X = \underline{\hspace{2cm}}$ $AB = \underline{\hspace{2cm}}$

$BC = \underline{\hspace{2cm}}$ $AC = \underline{\hspace{2cm}}$



$X = \underline{\hspace{2cm}}$ $AB = \underline{\hspace{2cm}}$

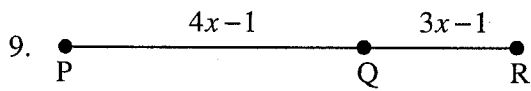
$BC = \underline{\hspace{2cm}}$ $AC = \underline{\hspace{2cm}}$



X = _____ AB = _____

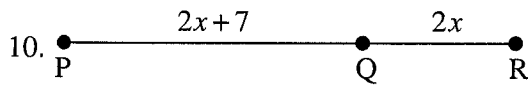
BC = _____ AC = _____

Suppose that $PR = 47$. Solve for x and find the length of segments PQ and QR .



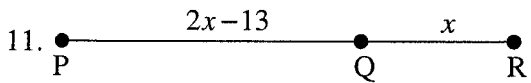
X = _____

PQ = _____ QR = _____



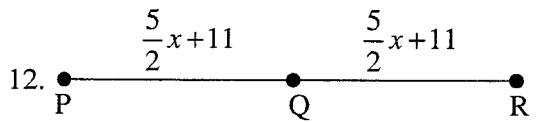
X = _____

PQ = _____ QR = _____



X = _____

PQ = _____ QR = _____



X = _____

PQ = _____ QR = _____

Write the Segment Addition Postulate for the points described. Draw a picture to help.

1. S is between D and P
2. J is between S and H
3. C is between Q and R
4. T is between M and N

C is between A and E. For each problem, draw a picture representing the three points and the information given. Solve for indicated.

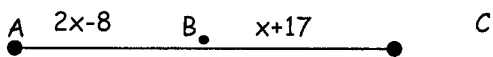
5. If $AC = 24$ in. and $CE = 13$ in., $AE =$ _____.
6. If $CE = 7$ in. and $AE = 23$ in., $AC =$ _____.

Find QR in the following problems. R is between Q and S.

7. If $RS = 44.6$ and $SQ = 68.4$, find QR.
8. If $RS = 33.5$ and $RQ = 80$, find SQ.

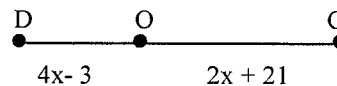
Refer to the figure and the given information to find each measure.

9. Given: $AC = 39$ m



- $x =$ _____
 $AB =$ _____
 $BC =$ _____

10. Given the figure and $DG = 60$ ft.



- $x =$ _____
 $DO =$ _____
 $OG =$ _____

If U is between T and B, find the value of x and the lengths of the segments. (Hint: Draw a picture for each problem with the given information and then write the equation to solve.)

11. $TU = 2x$, $UB = 3x + 1$, $TB = 21$

12. $TU = 4x - 1$, $UB = 2x - 1$, $TB = 5x$

$x = \underline{\hspace{2cm}}$

$x = \underline{\hspace{2cm}}$

$TU = \underline{\hspace{2cm}}$

$TU = \underline{\hspace{2cm}}$

$UB = \underline{\hspace{2cm}}$

$UB = \underline{\hspace{2cm}}$

$TB = \underline{\hspace{2cm}}$

Write an equation for the each:

13. Segment AB is congruent to segment BC $\underline{\hspace{4cm}}$

14. $\overline{XY} \cong \overline{AB}$ $\underline{\hspace{4cm}}$

15. Point B is midpoint of segment AC $\underline{\hspace{4cm}}$

16. $2x + 5$ is equal to $4x - 8$ $\underline{\hspace{4cm}}$

17. Point A is the midpoint of segment PT $\underline{\hspace{4cm}}$

For 18-19, suppose \overline{RS} is congruent to \overline{MN} . For each set of lengths, solve for x, and find the length of each segment. For 20-21, $\overline{AB} \cong \overline{BC}$.

18. $RS = 3x + 17$, $MN = 7x - 15$

19. $RS = x + 10$, $MN = 2x + 4$

$x = \underline{\hspace{2cm}}$

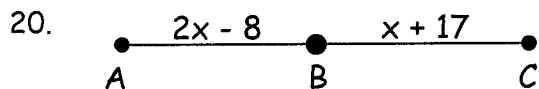
$x = \underline{\hspace{2cm}}$

$RS = \underline{\hspace{2cm}}$

$RS = \underline{\hspace{2cm}}$

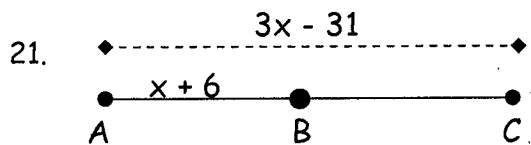
$MN = \underline{\hspace{2cm}}$

$MN = \underline{\hspace{2cm}}$



$x = \underline{\hspace{2cm}}$ $AB = \underline{\hspace{2cm}}$

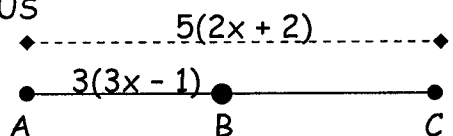
$BC = \underline{\hspace{2cm}}$ $AC = \underline{\hspace{2cm}}$



$x = \underline{\hspace{2cm}}$ $AB = \underline{\hspace{2cm}}$

$BC = \underline{\hspace{2cm}}$ $AC = \underline{\hspace{2cm}}$

BONUS



$x = \underline{\hspace{2cm}}$ $AB = \underline{\hspace{2cm}}$

$BC = \underline{\hspace{2cm}}$ $AC = \underline{\hspace{2cm}}$