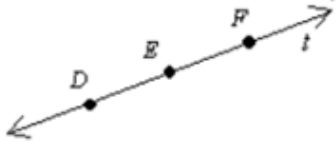
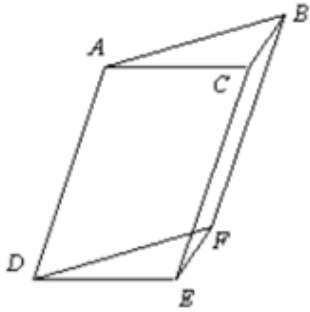


1. Which is an incorrect way to name the line?



- \overleftrightarrow{FE}
- line t
- \overleftrightarrow{DF}
- \overleftrightarrow{E}

2. Name the plane represented by the right side of the figure.

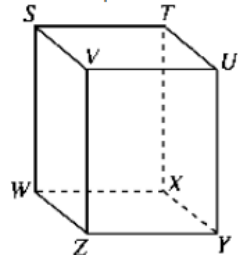


- ABC
- DAB
- EDC
- BCE

3. If two lines intersect, then they intersect in exactly _____.

- one point
- one line
- two points
- one plane

4. Which point is in the same plane as T , W , and S ?



- U
- X
- Z
- V

5. Name the line and plane shown in the diagram. Use three points contained by the plane to identify the plane.



- \overleftrightarrow{VW} and plane YV
- V and plane VWY
- \overleftrightarrow{VW} and plane YX
- \overleftrightarrow{VW} and plane VWY

